

# True or False?

Recognising coins



is equal to



True



is equal to




Both sets of coins show 55 p.



The three groups are equal.



## True



£20 is the same as  
 $£10 + £10$



£20 is the same as  
 $£5 + £5 + £5 + £5$

# True or False ?

Counting in coins



The sets of money are all equal.

False



All sets of coins show 20 p except the 1 p coins  
which show 15 p